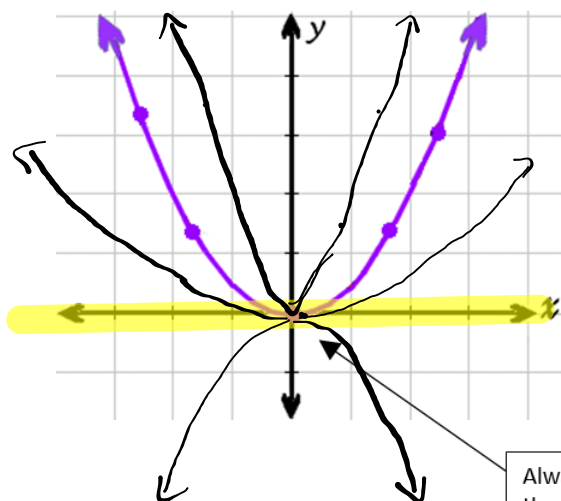


QUADRATIC FUNCTION or SECOND-DEGREE POLYNOMIAL FUNCTION

... is a **curve** called a *parabola*



RULE or EQUATION:

$$y = a(x^2)$$

Sometimes "y" is written f(x) ... say "f of x", which means function of x

Always passes through the origin (0, 0)

Jan 31-1:31 PM

Parameter "a" → stretches, compresses or flips the parabola

Negative a

$$y = x^2$$

$$\rightarrow y = -x^2$$

Flip
(reflection on x-axis)

a > 1

$$\rightarrow y = 2x^2$$

Vertical stretch
(thinner)

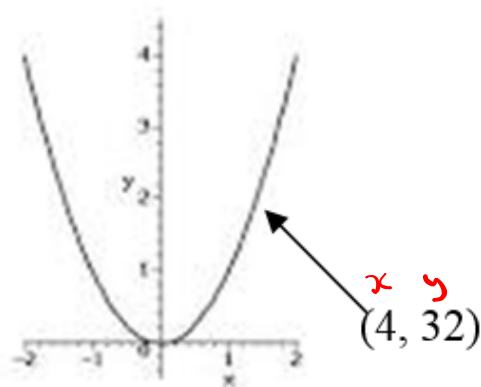
0 < a < 1

→

Vertical compression
(wider)

Jan 31-1:40 PM

To find the equation: plug in one point (x, y) and solve for **a**



$$\begin{aligned} y &= a(x^2) \\ 32 &= a(4^2) \\ 32 &= a(16) \\ \frac{32}{16} &= \frac{a(16)}{16} \\ 2 &= a \end{aligned}$$

Equation: $y = 2x^2$

USE THE EQUATION to answer questions!!!

- If given a **y-value**, plug in and **solve for x**!
- If given an **x-value**, plug in and **solve for y**!

Ex $x = 6$
 $\Rightarrow y = 2(6^2)$
 $= 72$

Ex $y = 50$
 $50 = 2x^2$
 $\frac{50}{2} = \frac{2x^2}{2}$
 $25 = x^2$
 $\sqrt{25} = \sqrt{x^2}$
 $5 = x$

Jan 31-1:41 PM

1. A parabola is defined by the equation $y = ax^2$ and passes through the point A(-4, 8). Point B on this parabola has an x-coordinate of 6.

What is the y-coordinate of point B?

$(-4, 8)$ $\textcircled{1}$ $y = ax^2$ $\textcircled{2}$ $y = \frac{1}{2}(6)^2$
 $8 = a(-4)^2$ $2y = \frac{1}{2}(36)$
 $\frac{8}{16} = \frac{a(16)}{16}$ $y = 18 \checkmark$
 $\frac{1}{2} = a$

Jan 31-1:45 PM

2. A table of values for the **quadratic function** $g(x)$ is given.

What is the rule of function $g(x)$? _____

x	g(x)
0	0
5	37.5
8	96

$$y = ax^2$$

$$37.5 = a(5)^2$$

$$\frac{37.5}{25} = \frac{a(25)}{25} \Rightarrow 1.5 = a$$

$$y = 1.5x^2$$

Cannot use \rightarrow

Jan 31-1:47 PM

3. A pebble is dropped into a well.

The table of values illustrates the **quadratic function**, which gives the distance travelled by the pebble (in m) as a function of the drop time (in seconds).

x Drop time (sec)	y Distance travelled (m)
0	0
1	5
2	20

Determine the drop time if the well has a depth of 180 m.

① $y = ax^2$ $y = 5x^2$ $a = 5$

$$5 = a(1)^2$$

$$\frac{5}{1} = \frac{a(1)}{1}$$

② $180 = 5x^2$

$$\frac{180}{5} = \frac{5x^2}{5}$$

$$= \sqrt{36} = x^2$$

$$= 6 \text{ sec.}$$

Feb 1-1:17 PM

4. Aiden is celebrating his birthday by setting off a rocket. The height of the rocket he launches varies with time according to a quadratic function. Some of the values of this function are shown in the table below.

Time (seconds)	2	4	6	10
Height (metres)	16	64	144	400

The rocket is designed to explode when it reaches a height of 1600 metres.

How many seconds after launch will the rocket explode?

Feb 1-1:22 PM

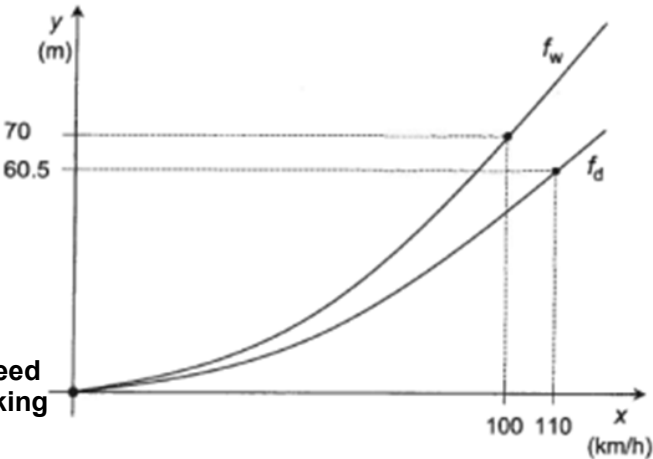
6. Gabriel is doing some road tests with his new car. The braking distance depends on the speed of the car when the brakes are applied and on the road conditions.

where	x : speed of the car, in km/h, when the brakes are applied
	$f_d(x)$: braking distance on a dry surface, in m
	$f_w(x)$: braking distance on a wet surface, in m

The rules of functions f_d and f_w are of the form $f(x) = ax^2$.

Gabriel is travelling at a certain speed on a wet surface. When he suddenly brakes, the braking distance of his car is 44.8 m.

If Gabriel were travelling at the same speed on a dry surface, what would be the braking distance of his car?



Feb 1-1:24 PM

7. An experiment is designed to test the braking distance in two cars. Each of the tables below gives the distance the car travelled from the moment the brakes were applied to the moment the car stopped completely.

Car A

x speed (km/h)	f(x) braking distance (m)
50	25
80	64

Car B

x speed (km/h)	g(x) braking distance (m)
40	24
90	121.5

It is determined that both functions follow a quadratic model. **What is the difference in the braking distance of car A and car B when both cars were travelling at 100 km/h?**